


Fractions of Amounts

Find half of these amounts. Use counters or buttons to help, or draw a circle around half to find the answer. The first one has been done for you.

half of is

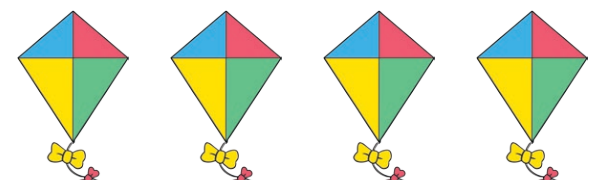
sweets



$\frac{1}{2}$ of =

half of is


kites



$\frac{1}{2}$ of =

half of is


cats



$\frac{1}{2}$ of =

half of is


flowers



$\frac{1}{2}$ of =

half of is


trees



$\frac{1}{2}$ of =

half of is

stars



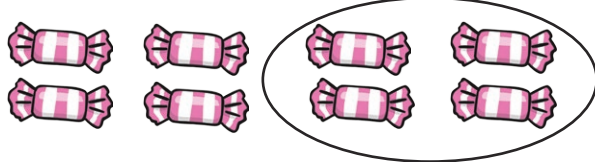
$\frac{1}{2}$ of =

Fractions of Amounts

Find half of these amounts. Use counters or buttons to help, or draw a circle around half to find the answer. The first one has been done for you.

half of is

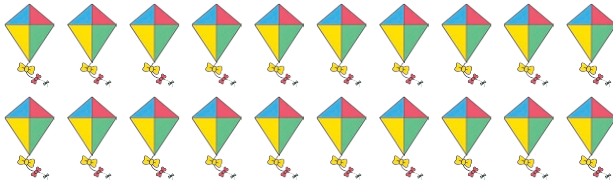
sweets



$\frac{1}{2}$ of =

half of is


kites



$\frac{1}{2}$ of =

half of is

cats



$\frac{1}{2}$ of =

Now try these:

Draw 12 stars then find half.

Draw 16 flowers then find half.

Fractions of Amounts

Draw 8 stars then find half.

Draw 14 flowers then find half.

$$\frac{1}{2} \text{ of } 8 = \square$$

$$\frac{1}{2} \text{ of } 14 = \square$$

Complete these number sentences.

$$\frac{1}{2} \text{ of } 4 = \square$$

$$\frac{1}{2} \text{ of } 6 = \square$$

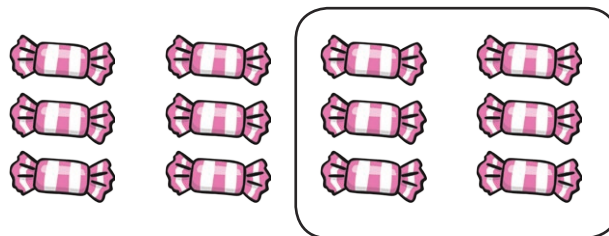
$$\frac{1}{2} \text{ of } 10 = \square$$

$$\frac{1}{2} \text{ of } 2 = \square$$

$$\frac{1}{2} \text{ of } 20 = \square$$

$$\frac{1}{2} \text{ of } 18 = \square$$

Write your own number sentence for this picture.




Fractions of Amounts Answers

Find half of these amounts. Use counters or buttons to help, or draw a circle around half to find the answer. The first one has been done for you.

half of **8** is **4**

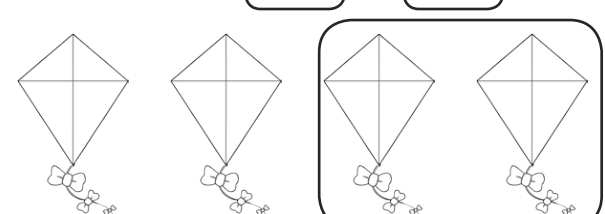
8 sweets



$\frac{1}{2}$ of **8** = **4**

half of **4** is **2**

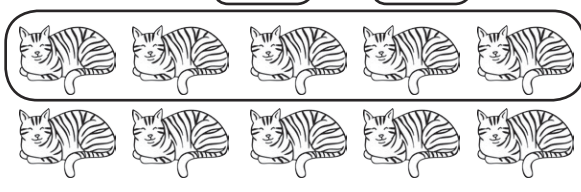
4 kites



$\frac{1}{2}$ of **4** = **2**

half of **10** is **5**


10 cats



$\frac{1}{2}$ of **10** = **5**

half of **6** is **3**


6 flowers



$\frac{1}{2}$ of **6** = **3**

half of **2** is **1**


2 trees



$\frac{1}{2}$ of **2** = **1**

half of **12** is **6**

12 stars



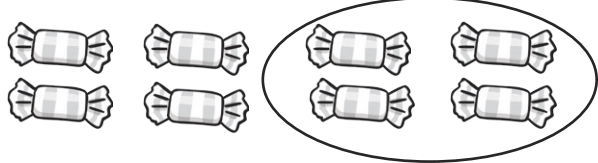
$\frac{1}{2}$ of **12** = **6**

Fractions of Amounts Answers

Find half of these amounts. Use counters or buttons to help, or draw a circle around half to find the answer. The first one has been done for you.

half of **8** is **4**

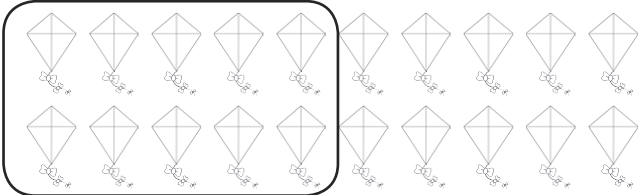
8 sweets



$\frac{1}{2}$ of **8** = **4**

half of **20** is **10**


20 kites



$\frac{1}{2}$ of **20** = **10**

half of **14** is **7**


14 cats




$\frac{1}{2}$ of **14** = **7**

Now try these:

Draw **12** stars then find half.

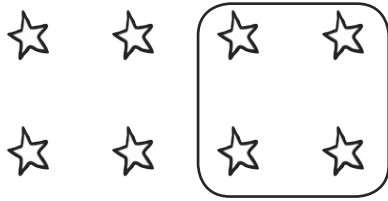


Draw **16** flowers then find half.



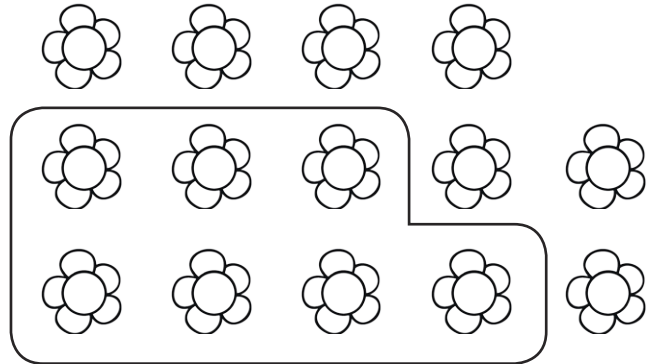
Fractions of Amounts **Answers**

Draw 8 stars then find half.



$$\frac{1}{2} \text{ of } 8 = \boxed{4}$$

Draw 14 flowers then find half.



$$\frac{1}{2} \text{ of } 14 = \boxed{7}$$

Complete these number sentences.

$$\frac{1}{2} \text{ of } 4 \text{ is } \boxed{2}$$

$$\frac{1}{2} \text{ of } 6 = \boxed{3}$$

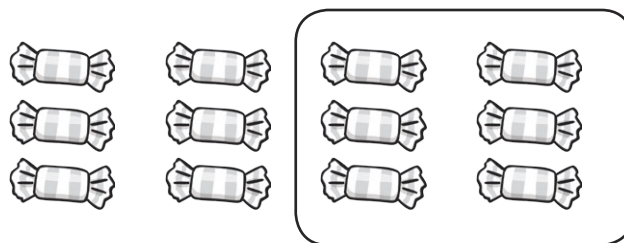
$$\frac{1}{2} \text{ of } 10 \text{ is } \boxed{5}$$

$$\frac{1}{2} \text{ of } 2 = \boxed{1}$$

$$\frac{1}{2} \text{ of } 20 \text{ is } \boxed{10}$$

$$\frac{1}{2} \text{ of } 18 = \boxed{9}$$

Write your own number sentence for this picture.



$$\frac{1}{2} \text{ of } 12 = 6$$

$$\text{half of } 12 = 6$$