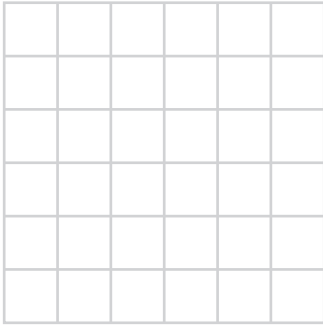


**Drawing shapes**

Draw any closed shape in each grid with the following Perimeter.


1)

Perimeter = 10 units



2)

Perimeter = 16 units




3)

Perimeter = 18 units




4)

Perimeter = 22 units




5)

Perimeter = 19 units



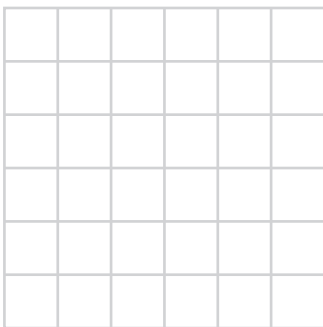
6)

Perimeter = 13 units




7)

Perimeter = 20 units



8)

Perimeter = 14 units




9)

Perimeter = 24 units



Draw 3 different closed shapes with the Perimeter 12 units.

10)



11)



12)

