

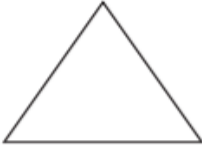
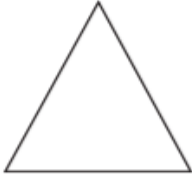
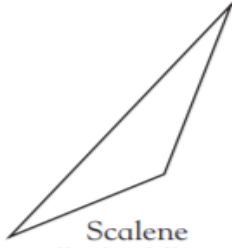
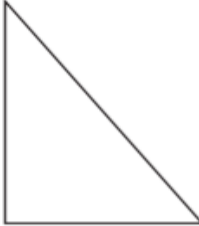
Name \_\_\_\_\_

Mrs Henry's Class Maths Homework








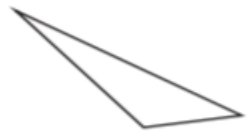
Date given: 23.11.2020

Date due: 30.11.2020


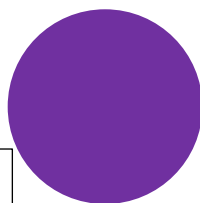


**A** Look at these different triangles.

			
Equilateral (all sides equal; is also isosceles)	Isosceles (two sides equal)	Scalene (all sides different)	Right angle (may be isosceles or scalene, but one angle must be a right angle)

Identify the type of triangle in each number. Write **E = equilateral**    **I = isosceles**    **S = scalene**    **R = right angle**

1 	2 	3 	4 
5 	6 	7 	8 

**B** Which of the following shapes have more than one line of symmetry?

**A**     **B**     **C**     **D** 

and

**C** Circle the largest angle.

			
---	---	--	---