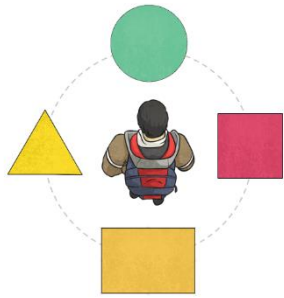


Name: _____

Miss Townley's Class Maths Homework


Week given 23.11.2020 – These are some of the things we will be looking at in our Maths set this week. Here are some questions for you to practise at home and return next Monday (30.12.2020).



- 1) The child is facing the circle. How many quarter turns does the child need to make to face the rectangle?

_____ quarter turns.

- 2) Draw all the lines of symmetry on the shapes below.



- 3) Order the following angles from smallest to largest in the boxes below.

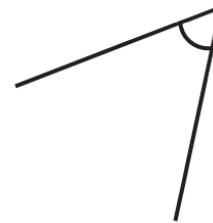
a)



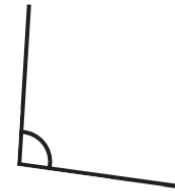
b)



c)

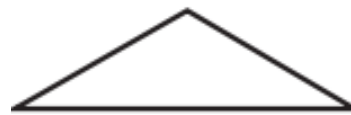


d)



--	--	--	--

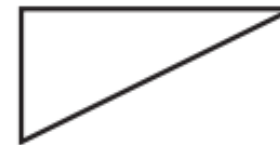
- 4) Label the triangles to show if it is an equilateral, right-angled, isosceles, or scalene triangle.













Challenge!

What shape has a right angle and two acute angles?
