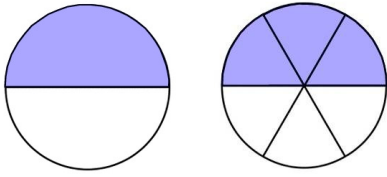


Equivalent Fractions (2)

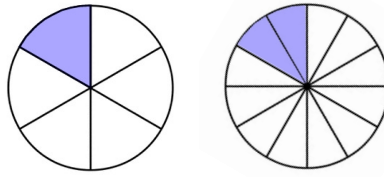


Name: _____

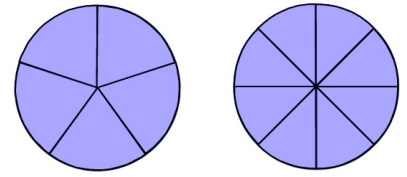
Date: _____



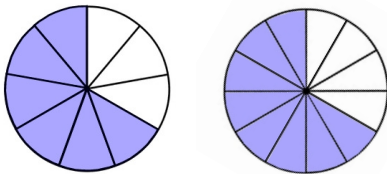
$$\frac{1}{2} = \frac{3}{6}$$



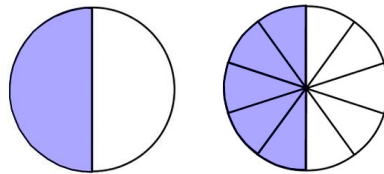
$$\square = \square$$



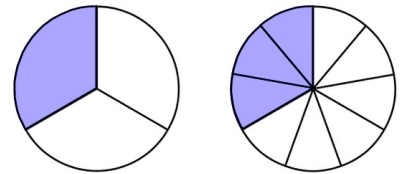
$$\square = \square$$



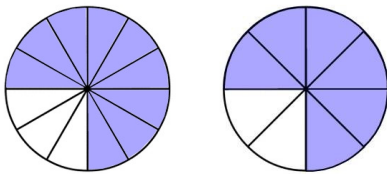
$$\square = \square$$



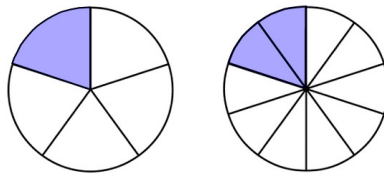
$$\square = \square$$



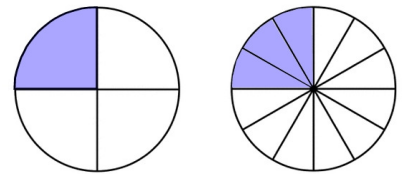
$$\square = \square$$



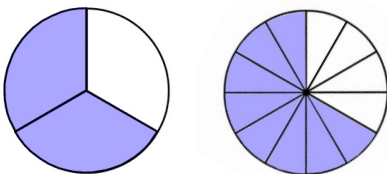
$$\square = \square$$



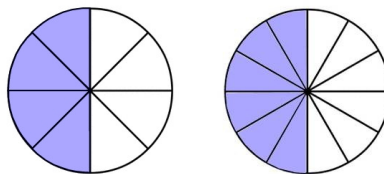
$$\square = \square$$



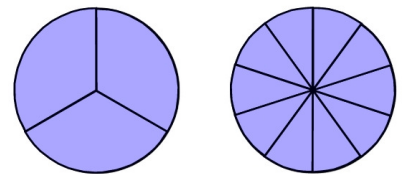
$$\square = \square$$



$$\square = \square$$



$$\square = \square$$



$$\square = \square$$

- Which of these fractions are equivalent to a half? How about a quarter?