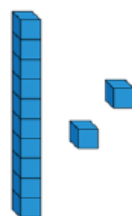
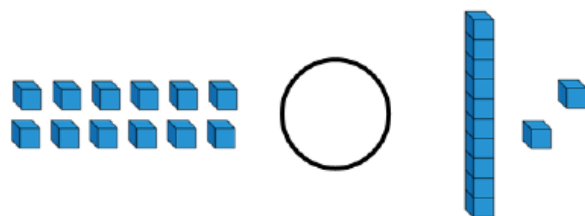
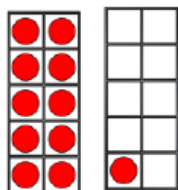
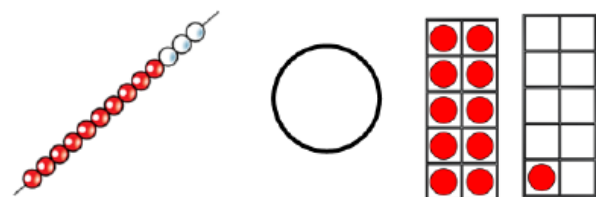


Use $<$, $>$ or $=$ to complete.



Complete the sentences.

_____ is one more than seventeen.

12 is one more than _____

Order the numbers from smallest to largest.

20 12 9 17

_____ smallest _____ largest

Mo says,



My number is less than 19 but greater than 16

What could Mo's number be?

Write 2 possible answers.

_____ or _____