

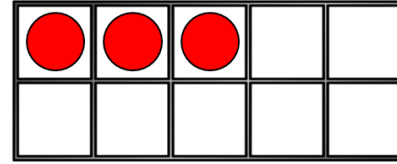
COUNT ONE MORE



GET READY



1) How many counters?



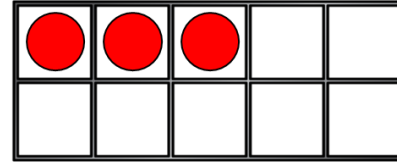
2) What number is missing? 4, 5, 6, __ , 8

3) How many pencils?



4) How do you spell 10?

1) How many counters?



3

2) What number is missing? 4, 5, 6, 7, 8

3) How many pencils?



5

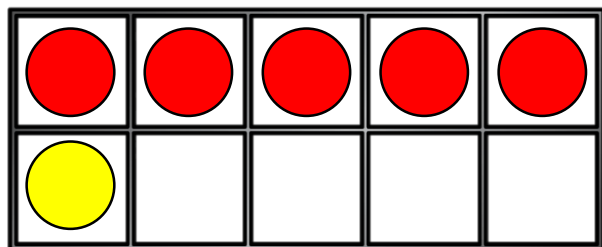
4) How do you spell 10? t-e-n

LET'S LEARN



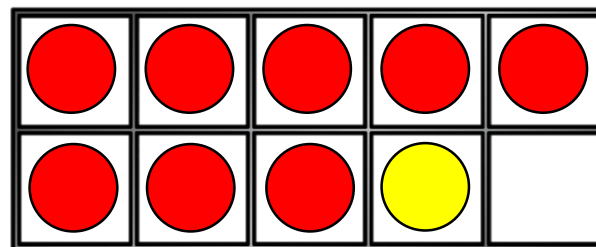
Count one more with ten frames

How many counters?

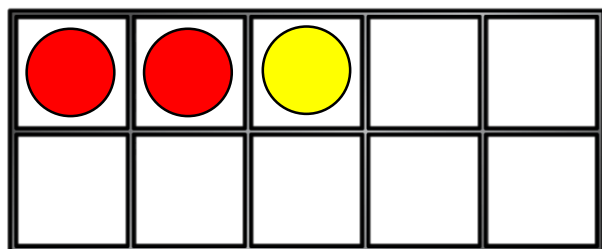


One more than 5 is 6

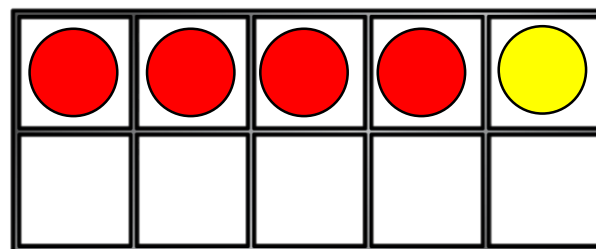
Count one more



One more than 8 is 9



One more than 2 is 3



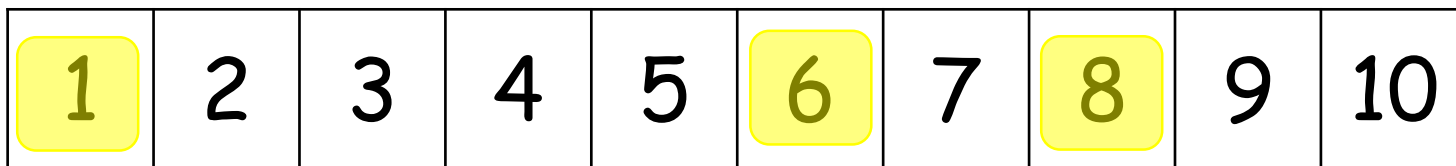
One more than 4 is 5

YOUR TURN

Have a go at question 1
on the worksheet



Count one more with number tracks



One more than 8 is 9

One more than 1 is 2

One more than 6 is 7

Have a think



one	two	three	four	five	six	seven	eight	nine	ten
-----	-----	-------	------	------	-----	-------	-------	------	-----

One more than 4 is five.

One more than 8 is nine.

One more than 2 is three.

YOUR TURN

Have a go at question 2
on the worksheet





It's our birthdays tomorrow!



Teddy is 4 today.
Tomorrow he will be 5.



Whitney is 9 today.
Tomorrow she will be ten.



1	2	3	4	5	6	7	8	9	10
---	---	---	---	---	---	---	---	---	----

YOUR TURN

Have a go at the rest
of the questions on the
worksheet

