





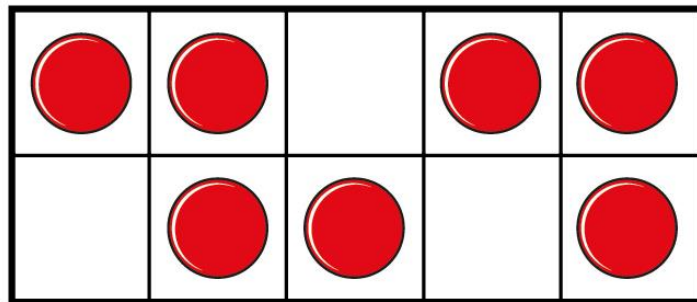
Count one more

I a) Draw one more than 4

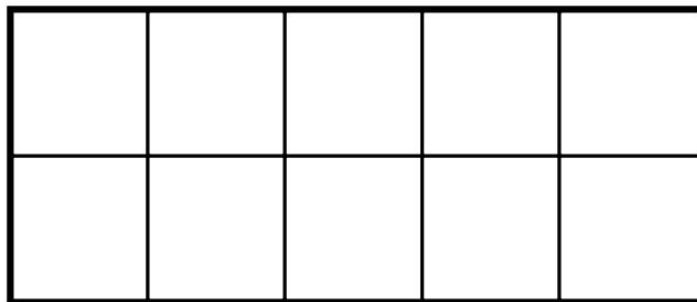
				



b) Draw one more than 7



c) Draw one more than 5



2

a) Circle one more than 6

1	2	3	4	5	6	7	8
---	---	---	---	---	---	---	---

b) Circle one more than 1

1	2	3	4	5	6	7	8
---	---	---	---	---	---	---	---

3

Write the missing numbers.

a) One more than 3 is

b) One more than seven is

c) One more than 9 is

d) One more than 0 is



4

Write the missing numbers.

- a) One more than is 5
- b) One more than is nine.
- c) One more than is 1



5

Colour the number that is one more than 6

10	9	8	7	6	5	4	3	2	1
----	---	---	---	---	---	---	---	---	---