


## Representing Numbers


1a. Circle the correct partitioning that shows the image below.



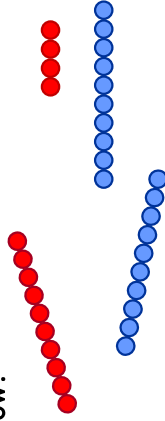
- 2 tens and 8 ones
- 4 tens and 9 ones
- 2 tens and 9 ones



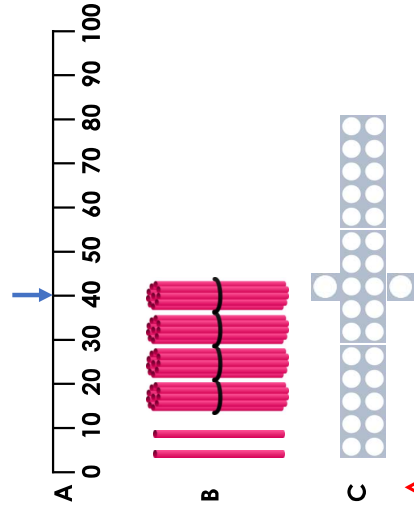
2a. True or false? This representation shows 6 tens and 2 ones.



3a. Count the tens and ones from the broken bead string. What number did it show?

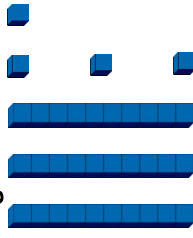


4a. Which representation shows 32?



## Representing Numbers


1b. Circle the correct partitioning that shows the image below.



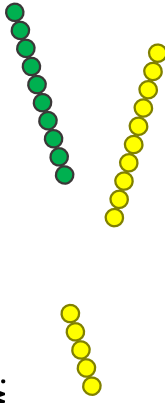
- 4 tens and 3 ones
- 3 tens and 4 ones
- 3 tens and 5 ones



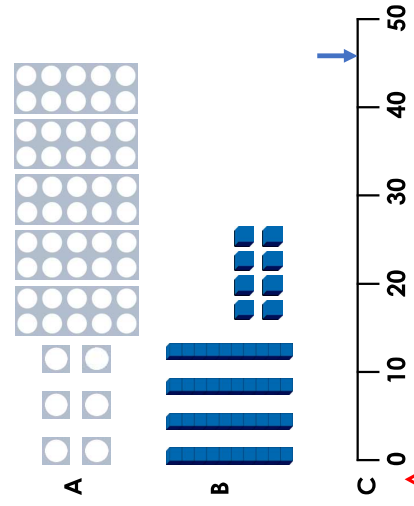
2b. True or false? This representation shows 5 tens and 4 ones.



3b. Count the tens and ones from the broken bead string. What number did it show?

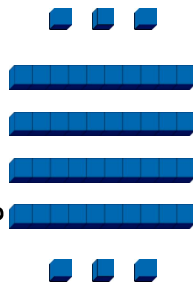


4b. Which representation shows 46?



## Representing Numbers


5a. Circle the correct partitioning that shows the image below.



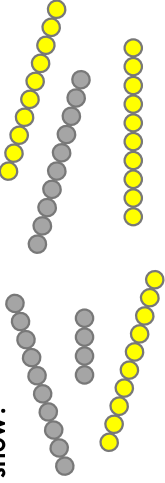
- 4 tens and 4 ones
- 4 tens and 6 ones
- 6 tens and 4 ones



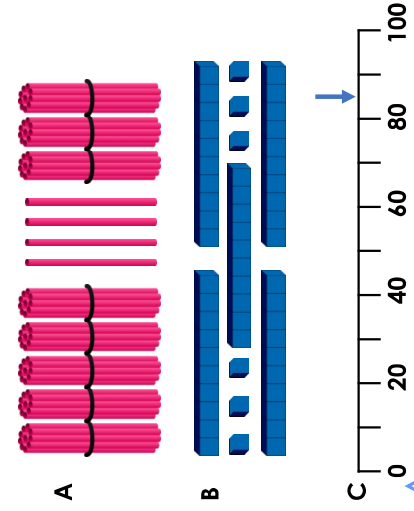
6a. True or false? This representation shows 6 tens and 2 ones.



7a. Count the tens and ones from the broken bead string. What number did it show?




8a. Which representation show 85?



## Representing Numbers

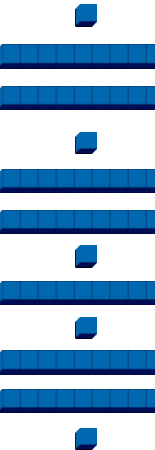
5b. Circle the correct partitioning that shows the image below.



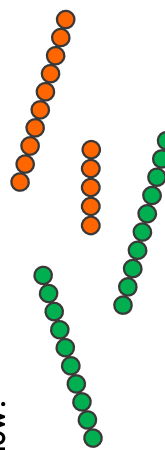
- 6 tens and 2 ones
- 4 tens and 6 ones
- 2 tens and 6 ones



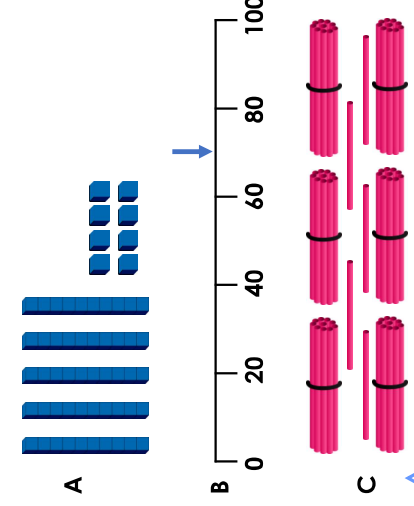
6b. True or false? This representation shows 8 tens and 5 ones.



7b. Count the tens and ones from the broken bead string. What number did it show?




8b. Which representation shows 65?



## Representing Numbers

9a. Circle the correct partitioning that shows the image below.



4 tens and 6 ones

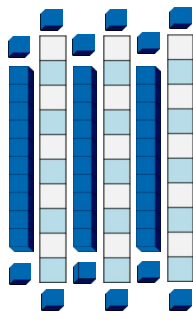
6 tens and 8 ones

5 tens and 8 ones




VF

10a. True or false? This representation shows 6 tens and 12 ones.




VF

11a. Count the tens and ones from the broken bead string. What number did it show?



VF

12a. Which representations show 64?



A

B


C



VF

## Representing Numbers

9b. Circle the correct partitioning that shows the image below.



4 tens and 7 ones


8 tens and 12 ones

4 tens and 14 ones



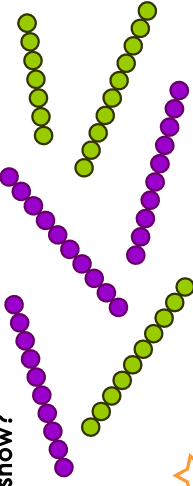
VF

10b. True or false? This representation shows 6 tens and 7 ones.



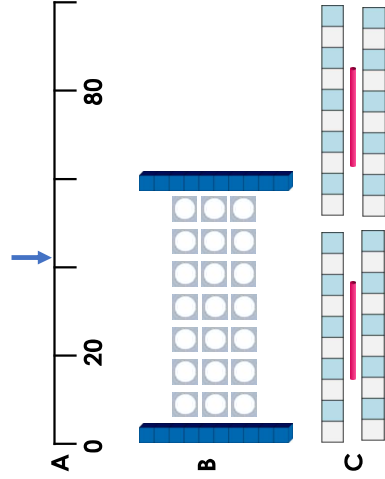
VF

11b. Count the tens and ones from the broken bead string. What number did it show?



VF

12b. Which representations show 41?



A

B

C



VF