

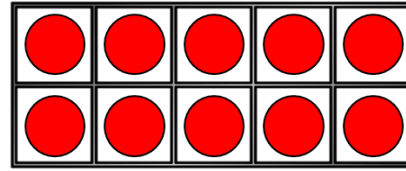
COUNT ONE LESS



GET READY



1) How many counters?




2) What number is missing? 8, 7, 6, __ , 4


3) How many pencils?



4) How do you spell 1?

1) How many counters?  10

2) What number is missing? 8, 7, 6, 5, 4

3) How many pencils?  3

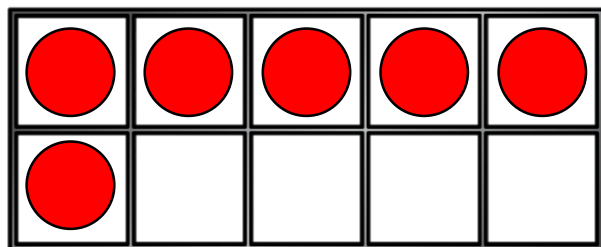
4) How do you spell 1? o-n-e

LET'S LEARN



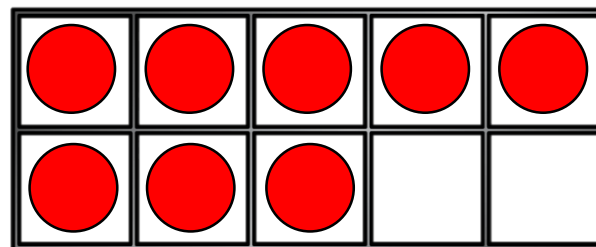
Count one less with ten frames

How many counters?

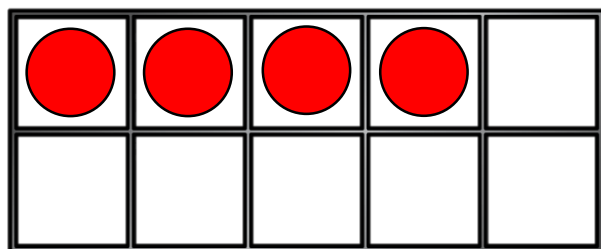


One less than 6 is 5

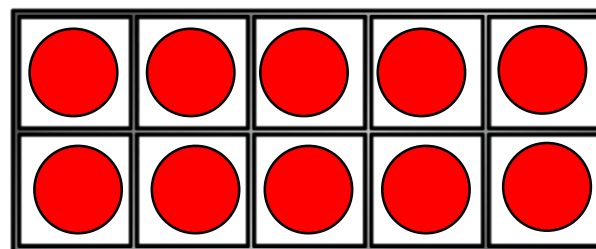
Count one less



One less than 8 is 7



One less than 4 is 3



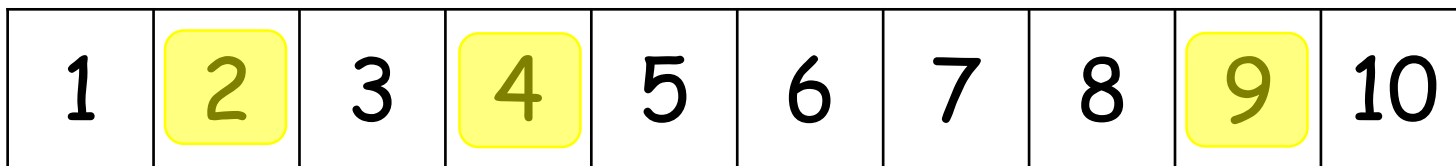
One less than 10 is 9

YOUR TURN

Have a go at question 1
on the worksheet



Count one less with number tracks



One less than 9 is 8

One less than 2 is 1

One less than 4 is 3

Have a think



one	two	three	four	five	six	seven	eight	nine	ten
-----	-----	-------	------	------	-----	-------	-------	------	-----

One less than 6 is five.

One less than 3 is two.

One less than 10 is nine.

YOUR TURN

Have a go at question 2
on the worksheet





I am going to take a banana and an apple to school.


There are 4 bananas.

One less than 4 is 3



There are 8 apples.

One less than 8 is 7



YOUR TURN

Have a go at the rest
of the questions on the
worksheet

