

Compare objects


I Write the missing phrase.

greater than


less than

equal to


a)



is _____

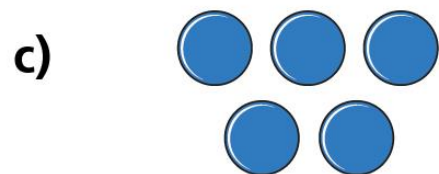


b)




is _____






is _____



is _____



is _____



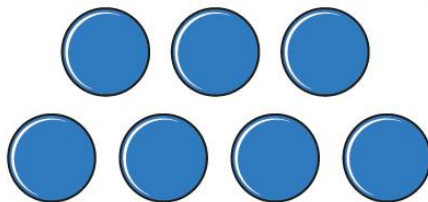


2

Draw Teddy's counters.



Annie



I have
fewer counters
than Annie.


Teddy



Is there more than one answer?



3 Make these towers with cubes.



Move 3 cubes to make the towers equal.