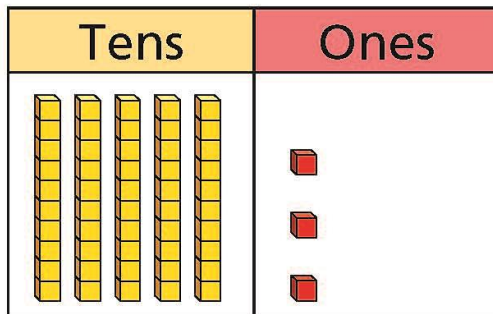


Use a place value chart

- I Complete the sentences.
a)





There are tens

and ones.

The number represented is

b)

Tens	Ones
	

There are tens
and ones.

The number represented is



c) What is the same and what is different about the place value charts?







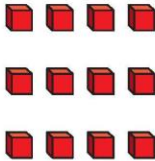
2

Complete the place value charts to represent the number 47

Tens	Ones
	

Tens	Ones
	

Tens	Ones
	7

Tens	Ones
	

3

What number is represented in each place value chart?
Complete the number sentences.

a)

Tens	Ones
2	6

$$\boxed{20} + \boxed{6} = \boxed{}$$

b)

Tens	Ones
3	0

$$\square + \square = \square$$

c)

Tens	Ones
0	9

$$\square + \square = \square$$

4

Complete the place value charts and sentences.

a)

Tens	Ones

There are 9 tens and 4 ones.

The number is

b)


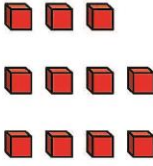
Tens	Ones



There are tens

and ones.

The number is 75

5

Tens	Ones
	

Tens	Ones
	

Dexter says that both place value charts represent the same number.

Eva says that cannot be true because they look different.

Who do you agree with? Why?

